










Open Number Line Subtraction Worksheet

Directions: Solve each problem by using the number line to the right.

$48 - 31 = \square$	
$29 - 16 = \square$	
$14 - 7 = \square$	
$55 - 39 = \square$	
$83 - 71 = \square$	
$64 - 18 = \square$	
$26 - 8 = \square$	
$46 - 37 = \square$	
$35 - 26 = \square$	
$89 - 47 = \square$	