


NAME: \_\_\_\_\_


DATE: \_\_\_\_\_

## Number Line Addition to 20


$13+5 = \square$




$8+7 = \square$



$2+11 = \square$



$15+3 = \square$



$9+2 = \square$

