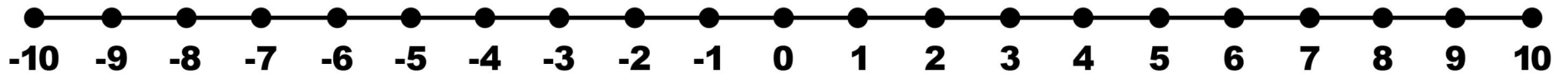


NAME: _____

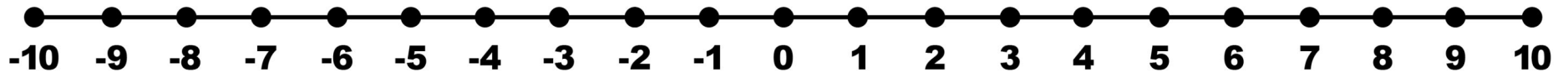
DATE: _____

Addition of Integers on a Number Line

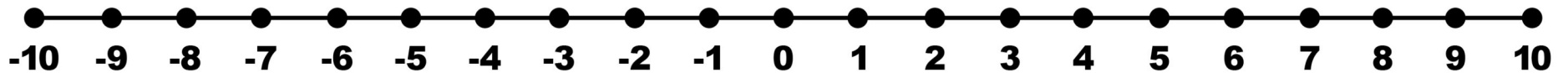
$$-3+5 = \square$$



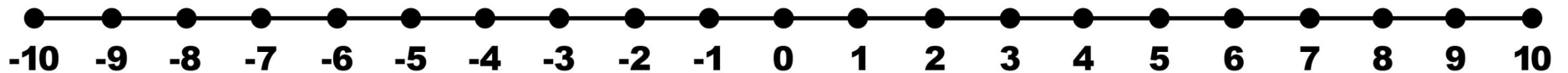
$$-6+3 = \square$$



$$-8+(-1) = \square$$



$$4+2 = \square$$



$$3+(-10) = \square$$

